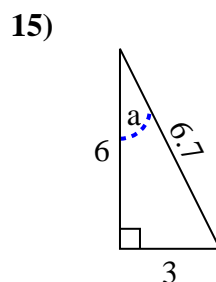
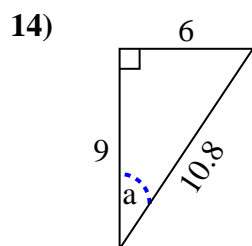
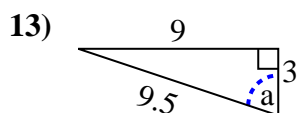
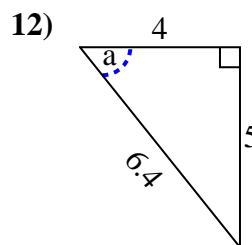
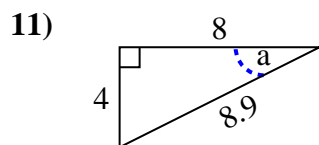
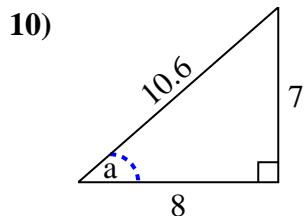
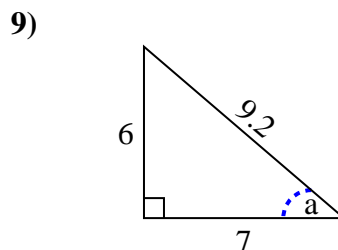
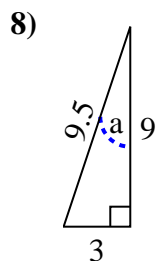
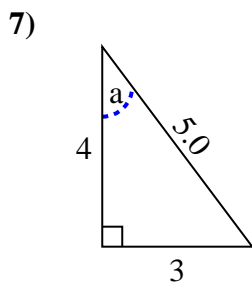
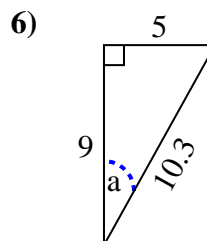
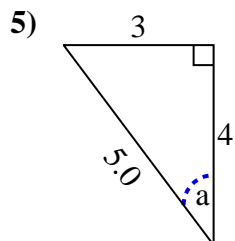
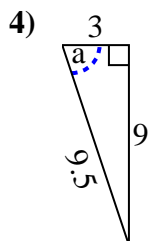
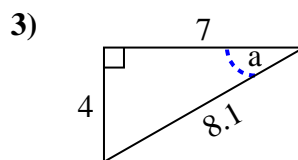
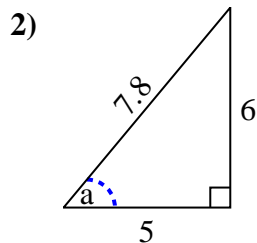
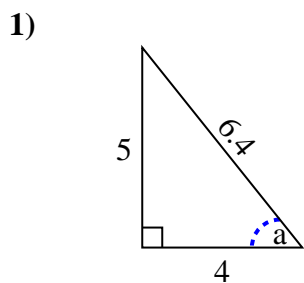


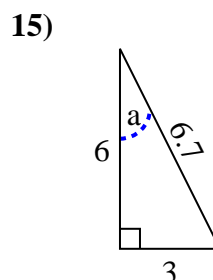
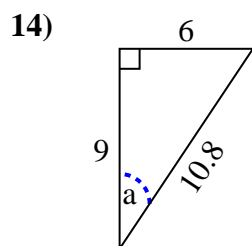
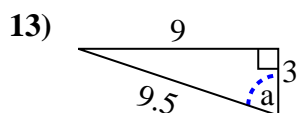
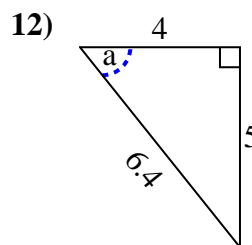
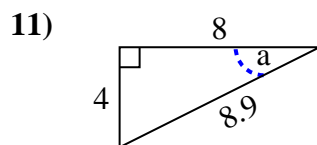
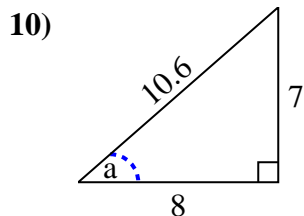
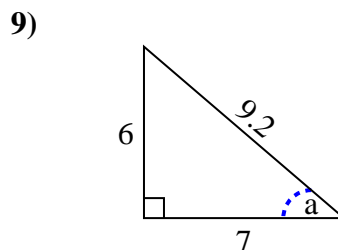
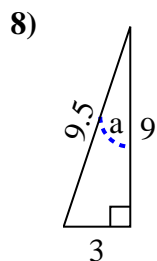
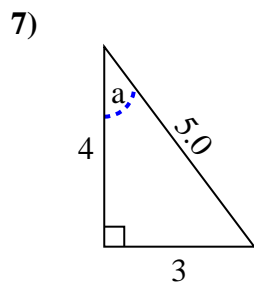
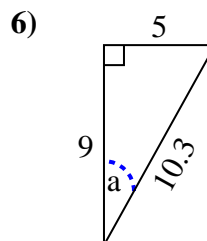
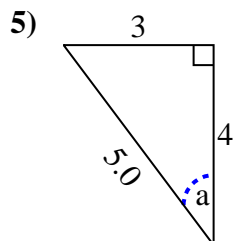
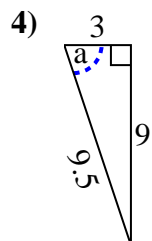
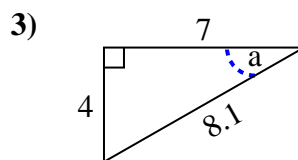
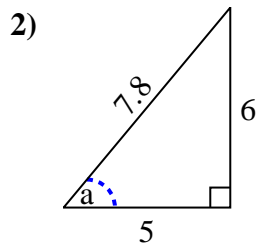
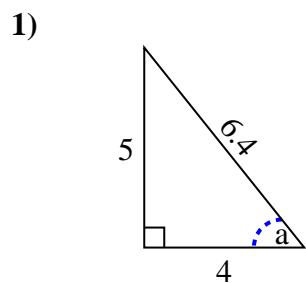


Identify the Opposite, Adjacent and Hypotenuse of Angle a.

Answers



1. _____
2. _____
3. _____
4. _____
5. _____
6. _____
7. _____
8. _____
9. _____
10. _____
11. _____
12. _____
13. _____
14. _____
15. _____

Identify the Opposite, Adjacent and Hypotenuse of Angle a .**Answers**1. 5, 4, 6.42. 6, 5, 7.83. 4, 7, 8.14. 9, 3, 9.55. 3, 4, 5.06. 5, 9, 10.37. 3, 4, 5.08. 3, 9, 9.59. 6, 7, 9.210. 7, 8, 10.611. 4, 8, 8.912. 5, 4, 6.413. 9, 3, 9.514. 6, 9, 10.815. 3, 6, 6.7